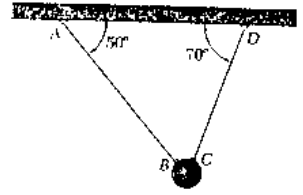


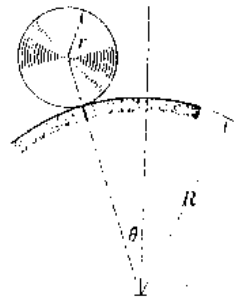
國立中央大學八十六學年度碩士班研究生入學試題卷

所別： 機械工程研究所 甲組 科目： 甲動力學 共 1 頁 第 1 頁

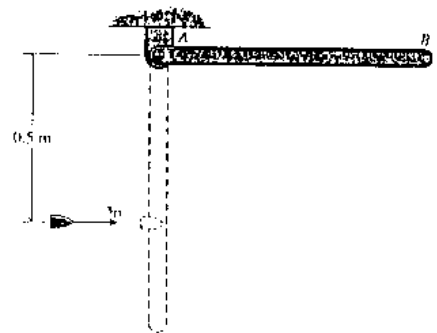
1. A sphere of weight W is held by two wires AB and CD . If AB is cut, find the tension in CD , (25%)
- before AB is cut,
 - immediately after AB has been cut,
 - immediately after AB has been cut if AB and CD are changed to TWO SPRINGS.



2. The circular disk of mass M and radius r is released from rest with $\theta = 0^\circ$ and rolls without slipping on the circular guide of radius R . Calculate the angle θ at which contact between the disk and the guide ceases. (25%)



3. A 3kg uniform slender rod AB 800mm long is released from rest when it is horizontal as shown in figure. If a 0.03kg bullet with the initial velocity of $v_0 = 350\text{m/s}$ strikes the rod when it is vertical and becomes embedded in it, determine: (25%)
- The angular velocity of the rod and bullet immediately after the impact.
 - The total system energy lost in the impact.
 - The maximum angle through which the rod will swing after the collision.



4. The triangular frame is constructed of uniform slender rod and is pivots about a horizontal axis through point O . Determine the critical driving frequency ω_c of the block B which will result in oscillations of the assembly which would tend to become excessively large. The total mass of the frame is m . (25%)

