

本科考試可使用計算器，廠牌、功能不拘

*請在試卷答案卷(卡)內作答

1. Let A, B, and C be independent random variables with distributions indicated below:

$$P(A = 1) = 0.5, P(A = 2) = 0.6$$

$$P(B = -3) = .25, P(B = -2) = 0.25, P(B = -1) = 0.25, P(B = 1) = 0.25$$

$$P(C = 1) = 0.5, P(C = 2) = 0.4, P(C = 3) = 0.1$$

What is the probability that $Ax^2 + Bx + C$ has real roots? (15 points)

2. Consider a factory manufacturing a metal rod of length t . Suppose that the number of defects appeared on a metal rod is Poisson distributed with mean λ times the length of the rod and, moreover, the numbers of defects appeared on non-overlapping sections on the same rod are independent. Let E_m be the event that exactly one defect occurred in each of the sub-intervals b_i and no defect occurred in any of the sub-interval a_i . Figure 1 illustrates how $2m + 1$ arbitrary sub-intervals a_i and b_i partition the length $[0, t]$.

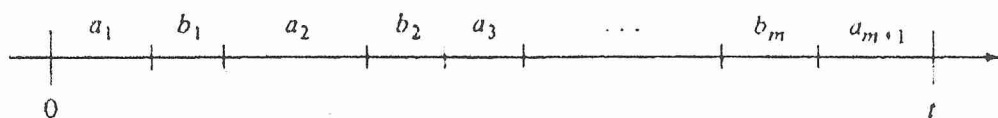


Figure 1

We wish to determine the probability that E_m occurs given that exactly m defects occurred in $[0, t]$, i.e., $P(E_m | m \text{ defects in } [0, t])$.

- (a) What is the probability that exactly m defects occurred in $[0, t]$. (4 points)
 (b) Determine $P(E_m)$ (8 points)
 (c) Determine $P(E_m | m \text{ defects in } [0, t])$ (8 points)
3. Two emergency response units, unit A and unit B, patrol uniformly and independently a 10-km stretch of road. An emergency incident occurs on the road and its position is uniformly distributed, independent of the positions of the response units. The incident requires both response units to be dispatched to the scene. Assume that response speed is fixed at 10 km per hour and U-turns are permitted.
- (a) Determine the mean travel time for unit A to reach the scene. (5 points)
 (b) Determine the mean time until the first unit (either A or B) reaches the scene. (5 points)
 (c) Determine the pdf for the time until the second unit reaches the scene. (5 points)
4. The midterm and final exam scores of 10 students in a statistics course are tabulated below. Let $\{x_i\}$ s be the midterm exam scores and $\{y_i\}$ s be the final exam scores. We wonder whether the score in the final exam is 10 points higher than the score in the midterm exam, therefore we conduct a test on it.

Midterm (x_i)	70	74	80	84	80	67	70	64	74	82
Final (y_i)	87	79	88	98	96	73	83	79	91	94

- (a) Please set up the appropriate hypotheses. (2 pts)
 (b) What is the test statistic and its distribution? (4 pts)
 (c) At $\alpha=0.05$, what is the rejection rule, and what is the critical value? (4 pts)
 (d) Please calculate the value of the test statistic based on the scores provided above. What is the corresponding p -value? (5 pts)
 (e) At $\alpha=0.05$, what is your conclusion, and why? (3 pts)
 (f) Use "Least Squares Method" to calculate the "least squares regression line" for these data. (6 pts)
 (g) If Sean got 75 points in the midterm exam, how many points would you expect he will get in the final exam? Please provide a point estimate and an interval estimate. (6 pts)

注意：背面有試題

參考用

國立中央大學103學年度碩士班考試入學試題卷

所別：工業管理研究所碩士班 不分組(一般生) 科目：統計學 共 3 頁 第 2 頁

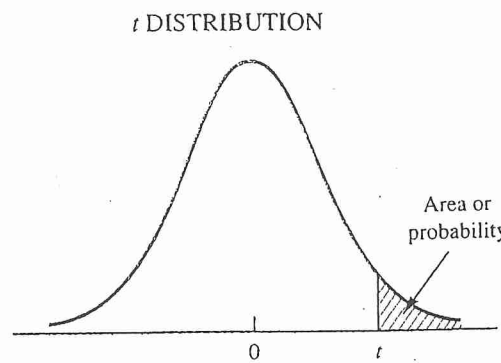
本科考試可使用計算器，廠牌、功能不拘

*請在試卷答案卷(卡)內作答

5. An experiment was performed to investigate the effectiveness of three materials. Five samples of each material were tested and the failure times (in seconds) are shown below:

Material	Failure Time (seconds)				
A	102	100	97	115	96
B	94	108	98	110	114
C	120	145	138	136	139

- (a) Use $\alpha=0.05$, do all three materials have the same effect on the mean failure time? (8 pts)
 (b) Please develop the 95% confidence intervals of the mean failure times for three materials separately. (6 pts)
 (c) Construct a graphical display of three confidence intervals developed in (b). When we do pairwise comparison, at $\alpha=0.05$, does there exist any significant difference on mean failure time between any pair of materials? (6 pts)



Entries in the table give t values for an area or probability in the upper tail of the t distribution. For example, with 10 degrees of freedom and a .05 area in the upper tail, $t_{.05} = 1.812$.

Degrees of Freedom	Area in Upper Tail				
	.10	.05	.025	.01	.005
1	3.078	6.314	12.706	31.821	63.657
2	1.886	2.920	4.303	6.965	9.925
3	1.638	2.353	3.182	4.541	5.841
4	1.533	2.132	2.776	3.747	4.604
5	1.476	2.015	2.571	3.365	4.032
6	1.440	1.943	2.447	3.143	3.707
7	1.415	1.895	2.365	2.998	3.499
8	1.397	1.860	2.306	2.896	3.355
9	1.383	1.833	2.262	2.821	3.250
10	1.372	1.812	2.228	2.764	3.169
11	1.363	1.796	2.201	2.718	3.106
12	1.356	1.782	2.179	2.681	3.055
13	1.350	1.771	2.160	2.650	3.012
14	1.345	1.761	2.145	2.624	2.977
15	1.341	1.753	2.131	2.602	2.947
16	1.337	1.746	2.120	2.583	2.921
17	1.333	1.740	2.110	2.567	2.898
18	1.330	1.734	2.101	2.552	2.878
19	1.328	1.729	2.093	2.539	2.861
20	1.325	1.725	2.086	2.528	2.845
21	1.323	1.721	2.080	2.518	2.831
22	1.321	1.717	2.074	2.508	2.819
23	1.319	1.714	2.069	2.500	2.807
24	1.318	1.711	2.064	2.492	2.797
25	1.316	1.708	2.060	2.485	2.787
26	1.315	1.706	2.056	2.479	2.779
27	1.314	1.703	2.052	2.473	2.771
28	1.313	1.701	2.048	2.467	2.763
29	1.311	1.699	2.045	2.462	2.756
30	1.310	1.697	2.042	2.457	2.750
40	1.303	1.684	2.021	2.423	2.704
60	1.296	1.671	2.000	2.390	2.660
120	1.289	1.658	1.980	2.358	2.617
∞	1.282	1.645	1.960	2.326	2.576

參考用

注意：背面有試題

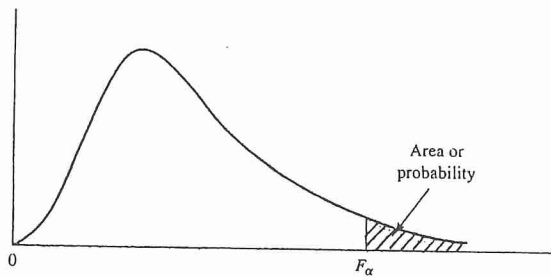
國立中央大學103學年度碩士班考試入學試題卷

所別：工業管理研究所碩士班 不分組(一般生) 科目：統計學 共 3 頁 第 3 頁

本科考試可使用計算器，廠牌、功能不拘

*請在試卷答案卷(卡)內作答

F TABLE - I



Entries in the table give F_{α} values, where α is the area or probability in the upper tail of the F distribution. For example, with 12 numerator degrees of freedom, 15 denominator degrees of freedom, and a .05 area in the upper tail, $F_{.05} = 2.48$.

Table of $F_{.05}$ Values

Denominator Degrees of Freedom	Numerator Degrees of Freedom																		
	1	2	3	4	5	6	7	8	9	10	12	15	20	24	30	40	60	120	∞
1	161.4	199.5	215.7	224.6	230.2	234.0	236.8	238.9	240.5	241.9	243.9	245.9	248.0	249.1	250.1	251.1	252.2	253.3	254.3
2	18.51	19.00	19.16	19.25	19.30	19.33	19.35	19.37	19.38	19.40	19.41	19.43	19.45	19.45	19.46	19.47	19.48	19.49	19.50
3	10.13	9.55	9.28	9.12	9.01	8.94	8.89	8.85	8.81	8.79	8.74	8.70	8.66	8.64	8.62	8.59	8.57	8.55	8.53
4	7.71	6.94	6.59	6.39	6.26	6.16	6.09	6.04	6.00	5.96	5.91	5.86	5.80	5.77	5.75	5.72	5.69	5.66	5.63
5	6.61	5.79	5.41	5.19	5.05	4.95	4.88	4.82	4.77	4.74	4.68	4.62	4.56	4.53	4.50	4.46	4.43	4.40	4.36
6	5.99	5.14	4.76	4.53	4.39	4.28	4.21	4.15	4.10	4.06	4.00	3.94	3.87	3.84	3.81	3.77	3.74	3.70	3.67
7	5.59	4.74	4.35	4.12	3.97	3.87	3.79	3.73	3.68	3.64	3.57	3.51	3.44	3.41	3.38	3.34	3.30	3.27	3.23
8	5.32	4.46	4.07	3.84	3.69	3.58	3.50	3.44	3.39	3.35	3.28	3.22	3.15	3.12	3.08	3.04	3.01	2.97	2.93
9	5.12	4.26	3.86	3.63	3.48	3.37	3.29	3.23	3.18	3.14	3.07	3.01	2.94	2.90	2.86	2.83	2.79	2.75	2.71
10	4.96	4.10	3.71	3.48	3.33	3.22	3.14	3.07	3.02	2.98	2.91	2.85	2.77	2.74	2.70	2.66	2.62	2.58	2.54
11	4.84	3.98	3.59	3.36	3.20	3.09	3.01	2.95	2.90	2.85	2.79	2.72	2.65	2.61	2.57	2.53	2.49	2.45	2.40
12	4.75	3.89	3.49	3.26	3.11	3.00	2.91	2.85	2.80	2.75	2.69	2.62	2.54	2.51	2.47	2.43	2.38	2.34	2.30
13	4.67	3.81	3.41	3.18	3.03	2.92	2.83	2.77	2.71	2.67	2.60	2.53	2.46	2.42	2.38	2.34	2.30	2.25	2.21
14	4.60	3.74	3.34	3.11	2.96	2.85	2.76	2.70	2.65	2.60	2.53	2.46	2.39	2.35	2.31	2.27	2.22	2.18	2.13
15	4.54	3.68	3.29	3.06	2.90	2.79	2.71	2.64	2.59	2.54	2.48	2.40	2.33	2.29	2.25	2.20	2.16	2.11	2.07
16	4.49	3.63	3.24	3.01	2.85	2.74	2.66	2.59	2.54	2.49	2.42	2.35	2.28	2.24	2.19	2.15	2.11	2.06	2.01
17	4.45	3.59	3.20	2.96	2.81	2.70	2.61	2.55	2.49	2.45	2.38	2.31	2.23	2.19	2.15	2.10	2.06	2.01	1.96
18	4.41	3.55	3.16	2.93	2.77	2.66	2.58	2.51	2.46	2.41	2.34	2.27	2.19	2.15	2.11	2.06	2.02	1.97	1.92
19	4.38	3.52	3.13	2.90	2.74	2.63	2.54	2.48	2.42	2.38	2.31	2.23	2.16	2.11	2.07	2.03	1.98	1.93	1.88
20	4.35	3.49	3.10	2.87	2.71	2.60	2.51	2.45	2.39	2.35	2.28	2.20	2.12	2.08	2.04	1.99	1.95	1.90	1.84
21	4.32	3.47	3.07	2.84	2.68	2.57	2.49	2.42	2.37	2.32	2.25	2.17	2.10	2.05	2.01	1.96	1.92	1.87	1.81
22	4.30	3.44	3.05	2.82	2.66	2.55	2.46	2.40	2.34	2.30	2.23	2.15	2.07	2.03	1.98	1.94	1.89	1.84	1.78
23	4.28	3.42	3.03	2.80	2.64	2.53	2.44	2.37	2.32	2.27	2.20	2.13	2.05	2.01	1.96	1.91	1.86	1.81	1.76
24	4.26	3.40	3.01	2.78	2.62	2.51	2.42	2.36	2.30	2.25	2.18	2.11	2.03	1.98	1.94	1.89	1.84	1.79	1.73
25	4.24	3.39	2.99	2.76	2.60	2.49	2.40	2.34	2.28	2.24	2.16	2.09	2.01	1.96	1.92	1.87	1.82	1.77	1.71
26	4.23	3.37	2.98	2.74	2.59	2.47	2.39	2.32	2.27	2.22	2.15	2.07	1.99	1.95	1.90	1.85	1.80	1.75	1.69
27	4.21	3.35	2.96	2.73	2.57	2.46	2.37	2.31	2.25	2.20	2.13	2.05	1.97	1.93	1.88	1.84	1.79	1.73	1.67
28	4.20	3.34	2.95	2.71	2.56	2.45	2.36	2.29	2.24	2.19	2.12	2.04	1.96	1.91	1.87	1.82	1.77	1.71	1.65
29	4.18	3.33	2.93	2.70	2.55	2.43	2.35	2.28	2.22	2.18	2.10	2.03	1.94	1.90	1.85	1.81	1.75	1.70	1.64
30	4.17	3.32	2.92	2.69	2.53	2.42	2.33	2.27	2.21	2.16	2.09	2.01	1.93	1.89	1.84	1.79	1.74	1.68	1.62
40	4.08	3.23	2.84	2.61	2.45	2.34	2.25	2.18	2.12	2.08	2.00	1.92	1.84	1.79	1.74	1.69	1.64	1.58	1.51
60	4.00	3.15	2.76	2.53	2.37	2.25	2.17	2.10	2.04	1.99	1.92	1.84	1.75	1.70	1.65	1.59	1.53	1.47	1.39
120	3.92	3.07	2.68	2.45	2.29	2.17	2.09	2.02	1.96	1.91	1.83	1.75	1.66	1.61	1.55	1.50	1.43	1.35	1.25
∞	3.84	3.00	2.60	2.37	2.21	2.10	2.01	1.94	1.88	1.83	1.75	1.67	1.57	1.52	1.46	1.39	1.32	1.22	1.00

參考用